


---



---



---



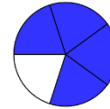
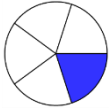
---



---



---




---



---



---



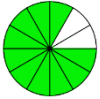
---



---



---




---



---



---



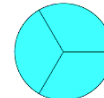
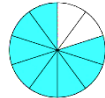
---



---



---




---



---



---



---

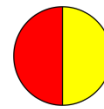


---



---

Kolikšen del kroga je pobarvan rumeno?




---



---



---



---

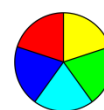


---



---

Kolikšen del kroga je pobarvan zeleno?




---



---



---



---






---





---




Pobarvaj polovico!



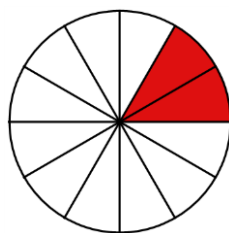
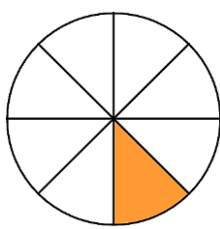
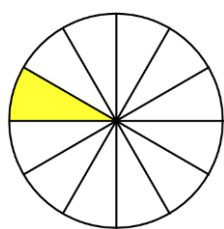
Pobarvaj tretjino!





Pobarvaj dve tretjini!



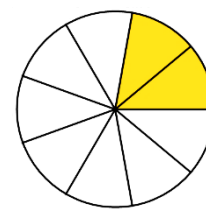
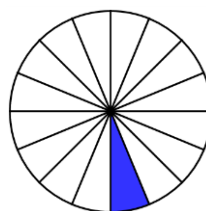
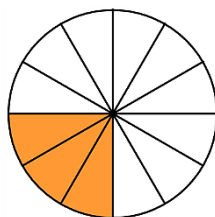
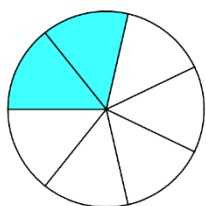
Dopolni, da bo pobarvana ena četrtnina kroga!



Pobarvaj dve četrtnini!



Dopolni, da bo pobarvano kot je zapisano!



$$\frac{5}{7}$$

$$1$$

$$\frac{1}{4}$$

$$\frac{1}{3}$$